

परमाणु ऊर्जा केन्द्रीय विद्यालय - 3, मुंबई

सामयिक परीक्षा - 1 (2025-26) जुलाई

कक्षा - पांचवी वर्ग - -----

हिंदी

समय - डेढ़ घंटे

अद्वितीय परीक्षा क्रमांक - -----

दिनांक - -----

ह.निरीक्षक - ----- ह.परीक्षक - ----- प्राप्तांक ----- पूर्णांक- 40

प्रश्न 1- निम्नलिखित गद्यांश को पढ़कर नीचे लिखे प्रश्नों के उत्तर लिखो। (5)

एक दिन अकबर दरबारियों के साथ बैठे हुए थे। बीरबल उस समय दरबार में नहीं थे। उसी समय दरबान ने आकर सूचना दी कि पड़ोसी राज्य से एक दूत आया है। वह बादशाह सलामत से मिलना चाहता है। अकबर ने दूत को दरबार में बुलाने की आज्ञा दी। दूत हाज़िर हुआ। उसने झुककर अकबर को सलाम किया और कहा, “बादशाह सलामत, मेरे राजा ने एक छोटा-सा सवाल पूछा है -

क.पड़ोसी राज्य से कौन आया था ?

ख.दूत किससे मिलना चाहता था ?

ग.एक दिन अकबर दरबार में किसके साथ बैठे हुए थे ?

घ.विलोम शब्द गद्यांश में से छाँटकर लिखो।

1.बड़ा x -----

ड. समान अर्थ वाले शब्द गद्यांश में से छाँटकर लिखो ।

1 .वक्त = -----

प्रश्न 2- पठित पद्यांश को पढ़कर पूछे गए प्रश्नों के उत्तर लिखो ।

(5)

एक बीज था गया बहुत ही , गहराई में बोया ।

उसी बीज के अंतर में था, नन्हा पौधा सोया ।

उस पौधे को मंद पवन ने , आकर पास जगाया ।

नन्ही – नन्ही बूँदों ने फिर , उस पर जल बरसाया ।

सूरज बोला , “प्यारे पौधे , निद्रा दूर भगाओ ।

अलसाई आँखें खोलो तुम , उठकर बाहर आओ ।

क.बीज को कहाँ बोया गया था ?

ख.बीज के अंतर में कौन सोया था ?

ग.पौधे को पास आकर किसने जगाया ?

घ.निद्रा दूर भगाने के लिए कौन कह रहा है ?

ड.समान अर्थ लिखो ।

पानी - -----

प्रश्न 3-उचित पर्याय पर सही का निशान लगाओ ।

(3)

क.तोते को चना खिलाने पर वह कैसे गाता है ?

- 1.म्याऊँ – म्याऊँ 2. टाँय – टाँय 3. भौँ – भौँ 4. चिंघाड़ना

ख.चींटी ने बगल में कितनी ईंटें ले ली ?

- 1.एक 2. चार 3. पाँच 4. दो

ग.गधा खजूर पर क्या खाने के लिए चढ़ा था ?

- 1.अनार 2. आम 3. अँगूर 4. खजूर

प्रश्न 4- समान अर्थ वाले शब्द लिखो ।

(2)

क.विशेष = ----- ख. लकीर = -----

प्रश्न 5- विलोम शब्द लिखो ।

(2)

क.आया x ----- ख. समय x -----

प्रश्न 6- वचन बदलो ।

(2)

क.छुट्टी - ----- ख. पौधा - -----

प्रश्न 7- लिंग बदलो ।

(2)

क. महाराज - ----- ख.माता - -----

प्रश्न 8-समान तुकवाले शब्द लिखो ।

(2)

क.बोला - ख. तन -

प्रश्न 9-पर्यायवाची शब्द लिखो ।

(2)

क.सूरज -

प्रश्न 10- दो ऐसे शब्द लिखो जो पढ़ने पर उल्टा – सीधा एक समान लगे ।

(2)

जैसे – मलयालम

.....

प्रश्न 11- शब्दों की अंत्याक्षरी पूरी करो ।

(2)

राम → महल → लड़का → काम → →

प्रश्न 12- नीचे दिए गए कोष्ठक में से चुनकर खाली जगह में संज्ञा शब्द लिखो ।

(2)

(हँसना , भालू , रोना , नाचना , किसान , खेलना)

.....

प्रश्न 13-नीचे दिए गए वाक्यों में विराम चिन्ह लगाओ ।

(2)

क) कौन किसान पर झपटा

ख) भालू का सिर चकरा गया

प्रश्न 14-विशेषता बताने वाले शब्द लिखो ।

(2)

----- फूल ----- मित्र

प्रश्न 15 - अशुद्ध शब्द को शुद्ध करो ।

(1)

क. दीनेस - -----

प्रश्न 16 - अक्षरों के क्रम को बदलकर सार्थक शब्द बनाओ ।

(1)

क . र ह दो प - -----

प्रश्न 17 .नीचे दिए वाक्य को शुद्ध करो ।

(1)

क.धरती तवे की तरह तप रहा था ।

प्रश्न 18- सुलेख लिखो ।

(2)

गरमी की छुट्टियाँ थीं । दोपहर के समय दिनेश घर में बैठा कोई कहानी पढ़ रहा था ।

ATOMIC ENERGY CENTRAL SCHOOL – 3, MUMBAI.

Periodic Test --1 (July. 2025)

CLASS : V Sec :__ Sub.: ENGLISH Date:_____ Time : 1½ hrs.

Unique Identification no. : _____ Max Marks:40

Invigilator's Sign: _____ Examiner's Sign:_____ Marks obtained :__

SECTION A -READING (10 MARKS)

A1. Read the following stanza and answer the questions that follow. (5 marks)

Be kind and gentle to all you meet,
Sharing a smile makes the day sweet.
A helping hand, a caring heart,
From kindness, we shall never part.
Lift others up when they feel low,
Plant seeds of love and let them grow.
Let kindness be your daily song,
And you will find where you belong.

A.1.1 Write any two pairs of rhyming words from the above stanza. (2 marks)

a) _____ - _____ b) _____ - _____

A.1.2 Pick out the word that means – (1 mark)

a) kind and soft - _____

A.1.3 Complete the sentence. (1 mark)

The poet asks us to share _____

A.1.4 Answer the question. (1 mark)

According to the poet, what should we plant and let grow?

A2. Read the passage carefully and answer the questions given below. (5 marks)

Ananya loves reading books about animals. One day, she visited a wildlife sanctuary with her family. She saw deer, elephants, and many colourful birds. The guide told them about how important it is to protect animals and trees. Ananya promised to take care of nature and teach others too.

A2.1 Write 4 nouns from the passage. (1 mark)

A2.2 Find the opposite from the passage. (2 marks)

i) harm X _____ ii) dull X _____

A2.3 Answer the question. (1 mark)

Q1. What did Ananya promise to do?

A2.4 Write true or false. (1 mark)

a) Ananya saw lions in the sanctuary. _____

b) The guide talked about the importance of protecting nature. _____

SECTION B-WRITING (10 MARKS)

B.1 Write 5 sentences on how you can keep your classroom clean. (5 marks)

B2. Write a story with the help of the clues given below.

(5marks)

(Once - a lion –live in a forest –was hungry - wander in search of food - can not find anything to eat – return to his den - see a rabbit – catch it - then see a deer near his den – left the rabbit - chase the deer - try his best – couldn't catch it - become very disappointed . Moral - Be happy - you have – don't be greedy)

SECTION C -GRAMMAR (12 MARKS)

C.1.1 Classify the following into Countable/Uncountable nouns. (2 marks)

apples traffic books milk

Countable Nouns: _____, _____

Uncountable Nouns: _____, _____

C.1.2 Rearrange the words to form a meaningful word. (2 marks)

a) note-_____ c) beak-_____

b) listen-_____ d) angel-_____

C.1.3 Choose the correct homophones and fill in the blanks. (1 mark)

a) She has a _____ of books on her shelf. (pair / pear)

b) The _____ is shining brightly. (sun / son)

C.1.4 Fill in the blanks using was/were and ____ing to make a meaningful

sentence. (3marks)

i) They _____ (play) cricket yesterday.

ii) I _____ (solve) questions in the Maths period.

iii) Birds _____ (sing) in the morning.

C.1.5 Fill in the blanks with the correct possessive pronouns.

(1 mark)

a) This bag belongs to me. It is _____. (my / mine)

b) That toy belongs to him. It is _____. (hers / his)

C.1.6 Combine the following sentences using "to".

(1 mark)

a) She went to the library. She wanted to read books.

C.1.7 Fill in the blanks by adding the correct prefix (un, re, pre, dis, mis). (2 marks)

i) The teacher asked him to _____ (write) the question.

ii) She felt _____ (happy) when it started to rain.

SECTION D- SPELLINGS (5 MARKS)

D.1 Add -ing to the given verbs.

(2 marks)

make- _____

smile- _____

D.2 Write two words each that begin with the letters.

(2 marks)

i) Pl: _____

ii) Pr: _____

D.3 Fill in the missing letters for the words which mean the same as -

(1 mark)

To be happy: J _ _ Y F _ _ L

To cry: W _ _ _ P

SECTION E- HANDWRITING (3 MARKS)

E.1 Rewrite the given passage in neat handwriting.

Helping others makes us feel happy and strong. We should always be ready to help those in need. When we help others, we make the world a better place. Even small acts of kindness can bring a smile on someone's face. Let us promise to help others and spread kindness everywhere.

ATOMIC ENERGY CENTRAL SCHOOL – 3, MUMBAI.**Periodic Test --1 (July. 2025)****CLASS : V Sec :__ Sub.: EVS Date:_____ Time : 1½ hrs.****Unique Identification no. : _____ Max Marks:40****Invigilator's Sign: _____ Examiner's Sign:_____ Marks obtained :__****OBSERVATION AND REPORTING (15 Marks)****1. Choose the correct answer and fill in the blanks.****5 x 1 = 5M**

- i. The diet which contains all the nutrients in the right quantity needed for the body is called _____ (junk food / balanced diet)
- ii. We get _____ from rocks and soil. (clothes / metals)
- iii. Windowpanes, bulbs, mirrors etc are made of _____. (glass / wood)
- iv. Things that do not change their shape easily are called _____ objects. (solid / liquid)
- v. _____ is an object that floats in water. (paper boat / pebble)

2. Match the following.**4 x ½ = 2M**

Earthquake

Opaque material

Plastic

Natural Calamity

Purnima

Highest mountain range in India

Himalayas

Full moon day

3. Observe the picture and answer the following questions.**3 x 2 = 6M**

i.



Name of object: _____

What is it made of?

ii.



Name of object: _____

Where can we mainly see it?

iii.



Name of object: _____

What is it used for?
_____**4. What are the advantages of outdoor games?****2M**

IDENTIFYING GROUP AND CLASSIFICATION (13 Marks)**5. Answer in one word.****4 x 1 = 4M**

i. Natural satellite of earth

ii. An animal which lives in the mountain region

iii. National cleanliness day

iv. A festival related to the moon

6. Circle the odd one.

- | | | | |
|--------------|------------|---------|---------|
| i. Flood | Earthquake | Dam | Drought |
| ii. Mountain | Hills | Valleys | Metals |
| iii. Rice | Dal | Rajma | Burger |


7. Answer the following questions

3 x 2 = 6M

- i. What are transparent objects? Give two examples.

- ii. Write any two healthy food habits.

- iii. Draw the symbols for the following.



No Parking



U-turn

DISCOVERY OF FACTS (12 Marks)**8. Give two examples**

2 x 2 = 4M

- i. Opaque objects _____ , _____

- ii. Things that sink in water _____ , _____

9. Write the difference of movements of the spinner when the position of the hole is: 2 x 1 = 2M


at the centre	away from the centre

10. Identify the animal by looking at its shadow. 4 x ½ = 2M




11. Colour the dustbins as given. Then choose which of the given items you will put in each. 4 x 1 = 4M

Dried leaves, Metals, Fruit peels, Plastic, Vegetable peels, paper, Egg shells, Pencil shavings



Green Bin



Blue bin

ATOMIC ENERGY CENTRAL SCHOOL – 3, MUMBAI.

Periodic Test --1 (July. 2025)

CLASS : V Sec :___ Sub.: MATHS Date:_____ Time : 1½ hrs.

Unique Identification no. : _____ Max Marks:40

Invigilator's Sign: _____ Examiner's Sign:_____ Marks obtained :___

KNOWLEDGE - 10 MARKS

I. Choose the correct answer from the brackets and fill in the blanks :

(1x5=5m)

i) Which of the following pair of 3 digit numbers have a difference of 54 ?

a) 564, 510

b) 690, 650

c) 300, 250

ii) Which of the following is a palindromic number ? _____

a) 320823

b) 51015

b) 10041

iii) The numeral for six lakhs six thousand eighteen is _____.

a) 606018

b) 60618

c) 660180

iv) The distance from Anushaktinagar to Nashik can be written as 180 _____.

a) metre

b) centimeters

c) kilometers

v) _____ $\frac{1}{8}$ make a whole.

a) Four

b) Two

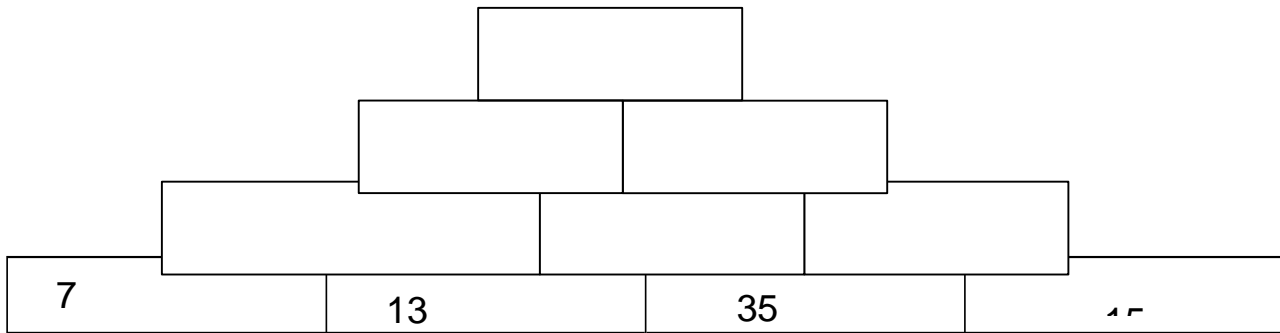
c) Eight

II. Observe the expanded forms and write the numbers correctly. (1x2=2m)

a) $40,000 + 600 + 40 =$ _____

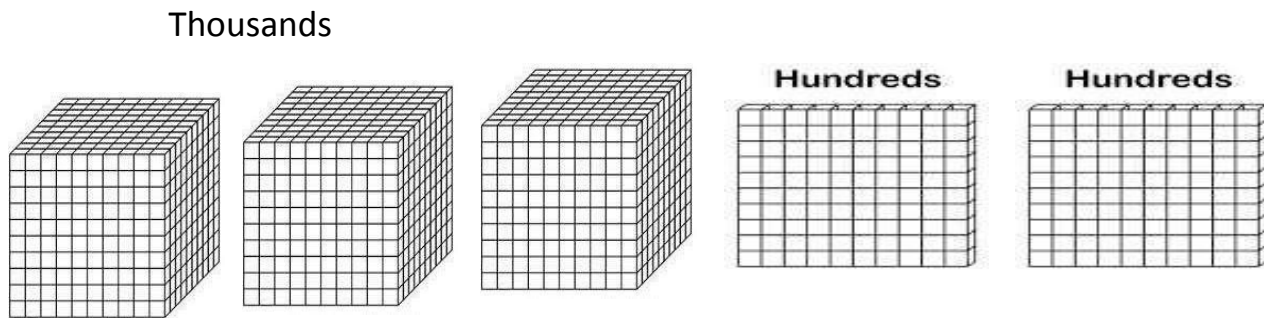
b) $6,00,000 + 5,000 + 200 + 8 =$ _____

III. Using the same sum rule, fill in the boxes. Example : $13+7 = 20$. (3m)



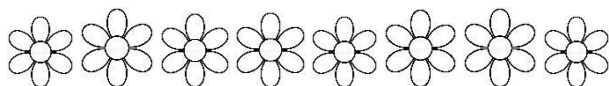
UNDERSTANDING BASIC CONCEPTS - 10 MARKS

I. a) Observe the Diene Blocks shown below and write the number which is represented by them. (1m)



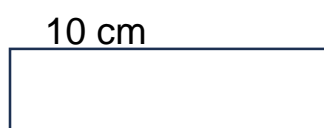
Ans : _____

b) Shade $\frac{1}{4}$ of the given collection of flowers. (1m)



I. Fill in the blanks. (1x3=3m)

- One lakh has _____ zeros in it.
- Complete the pattern : 10AB, 20BC, 30CD, 40DE, _____.
- The perimeter of the given rectangle is 30 cm. Its length is 10 cm. Its breadth is _____ cm.



III. How much time do the following activities take to complete ? (3m)

(minutes , hours, seconds ,days)

- i) to give a smile _____
- ii) morning assembly _____
- iii) to watch a movie _____

IV. Write all the 3-digit numbers that can be formed using the digits 4, 7 and 9. (Each digit should come only once in the number). (2m)

Ability to compute . (10 marks)

I. **State TRUE or FALSE.** (2m)

- a) A leap year has 29 days. _____
- b) All the sides and all the angles are equal In an equilateral triangle. _____

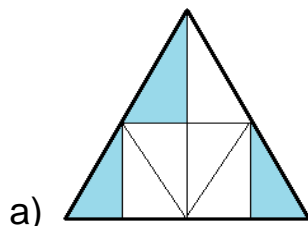
II. **Solve the following.** (2x2=4m)

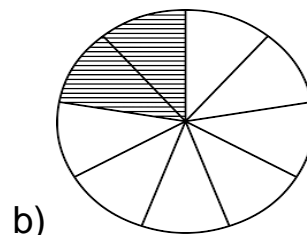
- a) $23,089 + 6,750$
- b) $40,504 - 21630$

III. **Convert into the given units.** (2m)

- a) $6 \text{ kg } 350 \text{ g} =$ _____ grams
- b) $7 \text{ km } 25 \text{ m} =$ _____ metres

IV. **Write the fractions for the shaded parts.** (2m)





PROBLEM SOLVING ABILITY (10 marks)

I. Solve the following.

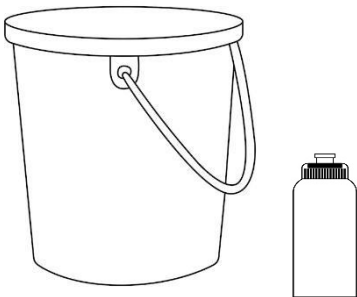
(2x5=10m)

- a) Distances from home to play ground of some children are given below. Understand the table and fill in the blanks.

Name of the children	Distance from home to play ground
Roshan	1 km 300 m
Mayank	950 m
Keerthi	2 km 500 m
Seema	1 km 400 m
Ajay	2 km 50 m

- i) Who lives nearest to the play ground ? _____
- ii) Who lives farthest from the play ground ? _____
- b) Mohna takes 2 rounds around a square garden of side 3 km in her bicycle every day . Find the distance travelled by her in the bicycle in one day .

- c) Ameya fills a bucket with a bottle of half liter capacity. She pours water into the bucket 12 times using the bottle. How much water does the bucket have now ?



- d) Multiply and find the product : 1623×45
- e) Roshan bought an umbrella for Rs 425 and a cricket bat for Rs 285. He gives two Rs 500 notes to the shop keeper. How much money does the shop keeper give him back ?